

1. Work out  $113 + 145$ .....  
(1 mark)2. Work out  $143 - 67$ .....  
(1 mark)3. Work out  $8 \times 21$ .....  
(1 mark)4. Work out  $104 \div 4$ .....  
(1 mark)

5. Round 2547 to the nearest 100

.....  
(1 mark)6. Work out  $13 - 20$ .....  
(1 mark)7. What is  $\frac{1}{4}$  of 28.....  
(1 mark)

8. Find 30% of 60

.....  
(1 mark)9. Convert  $\frac{1}{5}$  to a decimal.....  
(1 mark)10. Calculate  $4^2$ .....  
(1 mark)

11. Write down the next two numbers

1, 7, 13, 19, ....., .....,

(1 mark)

12. Simplify

 $\frac{2}{20}$ .....  
(1 mark)


Name : ..... Class..... Score.....


13. Simplify  $3a + 2a - a$   
 .....  
 (1 mark)

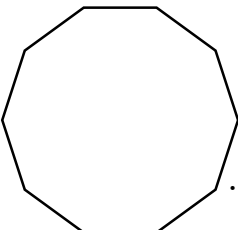
14. Simplify  $3 \times 3m$   
 .....  
 (1 mark)

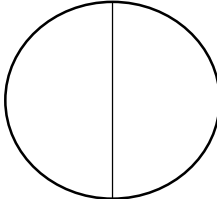
15. Expand  $3(a + 6)$   
 .....  
 (2 marks)

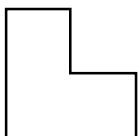
16. Write down all the factors of 20  
 .....  
 (1 mark)

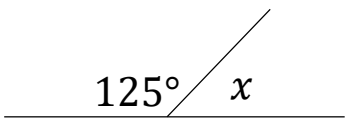
17. Calculate the perimeter  
  
 .....  
 (1 mark)

18. Calculate the area  
  
 .....  
 (1 mark)

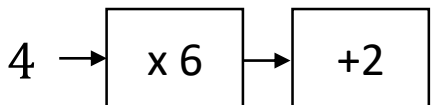
19. Name this shape  
  
 .....  
 (1 mark)

20. Name this part of a circle  
  
 .....  
 (1 mark)

21. Draw all the lines of symmetry  
  
 .....  
 (1 mark)

22. Calculate  $x$   
  
 $x = \dots\dots\dots$   
 (1 mark)

23. Workout  
 $3 \times 10^2$   
 .....  
 (1 mark)

24. Solve  
  
 .....  
 (1 mark)